

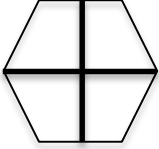
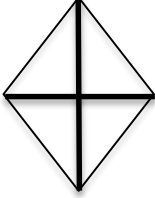













Year 2 Home Learning Task – Tuesday 9th January 2018

Please choose 1 task to complete. This week we have been learning about fractions.

Home learning to be completed and brought to school by Monday 15th January. Thank you.

Task 1	Task 2	Task 3
<p>Colour in $\frac{1}{4}$ of these shapes</p> <div style="text-align: center;">  </div> <div style="text-align: center;">  </div> <p>Colour in $\frac{3}{4}$ of these shapes</p> <div style="text-align: center;">  </div> <div style="text-align: center;">  </div> <p>Colour in $\frac{1}{3}$ of this shape</p> <div style="text-align: center;">  </div>	<div style="text-align: center;">  </div> <div style="text-align: center;">  </div> <div style="text-align: center;">  </div> <div style="text-align: center;">  </div> <div style="text-align: center;">  </div> <div style="text-align: center;">  </div> <p style="text-align: center; margin-top: 20px;">What fraction of the fossil is missing?</p> <p style="text-align: center;">Once you have found the missing fractions, you should have a whole fossil.</p>	<div style="text-align: center;">  </div> <div style="text-align: center; margin-top: 10px;">  </div> <div style="text-align: center; margin-top: 10px;">  </div> <div style="text-align: center; margin-top: 10px;">  </div> <p style="text-align: center; margin-top: 20px;">What fractions can you find around your home or in the local environment?</p> <p style="text-align: center;">Take some pictures or make a list of the fractions you find.</p>